

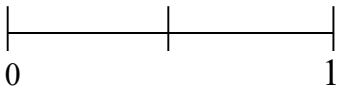






Name:

Weekly Homework Sheet Q3:3

Date:

Monday	Tuesday	Wednesday	Thursday																																								
Compare the numbers using $>$, $<$, or $=$. $827,937$ ___ $827,017$ $8,278,492$ ___ $8,372,189$	Write this number in expanded form. Twenty three thousand, four hundred thirty six	How many times larger is 700 than 70?	Write this number in word form. $39,083$																																								
Find the Sum. $27,202 + 3,489$	Find the Difference. $27,202 - 3,489$	Find the Sum. $17,081 + 8,391$	Find the Difference. $17,081 - 8,391$																																								
Find the product. 729×84	Find the product. $7,876 \times 8$	Find the product. 285×71	Find the product. 549×64																																								
Find the Quotient. $3,729 \div 5$	Find the Quotient. $6,392 \div 8$	Find the Quotient. $4,768 \div 7$	Find the Quotient. $2,489 \div 4$																																								
A book salesman sold 6,358 books. Each book cost \$8. How much money did he make?	There are 568 boxes of erasers. In each box, there are 48 erasers. How many erasers are there in all?	Melissa is having a party with 15 guests. If she spent a total of \$330 on food, how much did she spend on food for each person?	Ann purchased 8 packs of grape gum, 12 packs of cherry gum, and 6 packs of strawberry gum. If there are 6 pieces in each pack, how many pieces of gum did Ann purchase?																																								
Find ALL the factors of 45. Prime or Composite?	Find the first 5 multiples of 9.	Find ALL the factors of 73. Prime or Composite?	Find the first 5 multiples of 16.																																								
Fill in the table and find the rule. Rule: <table border="1" data-bbox="212 1356 370 1539"> <tr><td>1</td><td>5</td></tr> <tr><td>2</td><td>10</td></tr> <tr><td>3</td><td>15</td></tr> <tr><td>4</td><td></td></tr> <tr><td>10</td><td></td></tr> </table>	1	5	2	10	3	15	4		10		Fill in the table and find the rule. Rule: <table border="1" data-bbox="578 1356 735 1539"> <tr><td>1</td><td>3</td></tr> <tr><td>2</td><td>5</td></tr> <tr><td>3</td><td>7</td></tr> <tr><td>4</td><td></td></tr> <tr><td>10</td><td></td></tr> </table>	1	3	2	5	3	7	4		10		Fill in the table and find the rule. Rule: <table border="1" data-bbox="927 1356 1084 1539"> <tr><td>1</td><td>4</td></tr> <tr><td>2</td><td>7</td></tr> <tr><td>3</td><td>10</td></tr> <tr><td>4</td><td></td></tr> <tr><td>10</td><td></td></tr> </table>	1	4	2	7	3	10	4		10		Fill in the table and find the rule. Rule: <table border="1" data-bbox="1292 1356 1450 1539"> <tr><td>1</td><td>3</td></tr> <tr><td>2</td><td>6</td></tr> <tr><td>3</td><td>9</td></tr> <tr><td>4</td><td></td></tr> <tr><td>10</td><td></td></tr> </table>	1	3	2	6	3	9	4		10	
1	5																																										
2	10																																										
3	15																																										
4																																											
10																																											
1	3																																										
2	5																																										
3	7																																										
4																																											
10																																											
1	4																																										
2	7																																										
3	10																																										
4																																											
10																																											
1	3																																										
2	6																																										
3	9																																										
4																																											
10																																											
Find an equivalent fraction. $\frac{4}{5}$ 	Find an equivalent fraction. $\frac{3}{4}$ 	Use multiplication to find 2 equivalent fractions. $\frac{1}{4}$ $\frac{1}{6}$	Use multiplication to find 2 equivalent fractions. $\frac{2}{5}$ $\frac{3}{7}$																																								
Place the fractions on the number line below. $\frac{2}{4}$ $\frac{1}{5}$ $\frac{2}{3}$ 	Compare the fractions using $>$, $<$, or $=$ $\frac{3}{6}$ — $\frac{1}{3}$  	Compare the fractions using $>$, $<$, or $=$ $\frac{3}{4}$ — $\frac{5}{7}$  	Compare the fractions using $>$, $<$, or $=$ $\frac{2}{4}$ — $\frac{4}{6}$ 